


SATs Revision grids

$$295 - \boxed{} = 28.99 + 11.01$$



ALGEBRA

A plumber charges £15 per hour plus a £30 call out fee.



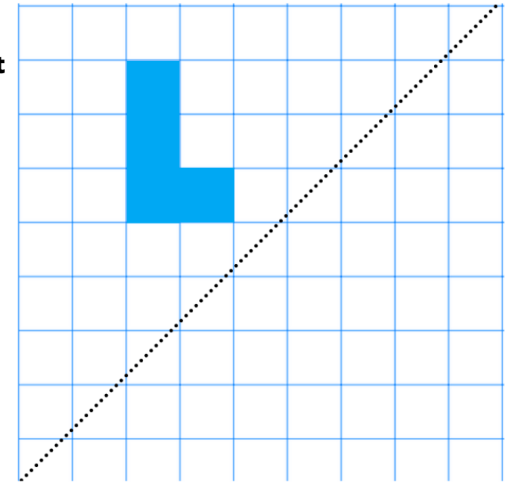
Express this algebraically (h = hours) _____

How much would the total cost be for 3 hours work? _____

The plumber charges £90.
How long did she spend on the job? _____

Reflection

Reflect the shape across the mirror line



Place Value

Use < or > to make the statements correct

$$37854 \quad \boxed{\phantom{< >}} \quad 37584$$


$$515689 \quad \boxed{\phantom{< >}} \quad 516589$$

$$75235 \quad \boxed{\phantom{< >}} \quad 72535$$

$$\frac{3}{4} \div 5 =$$



$$3\frac{1}{3} + 1\frac{4}{5} =$$





Ratio

On a school trip there are 40 people on a bus. There is 1 bus driver, 4 teachers and the rest are children. There are 5 more boys than girls in the group of children.



What is the ratio of boys to girls? _____ :

$$26 \overline{) 4186}$$



SATs Revision grids

$$295 - 255 = 28.99 + 11.01$$

ALGEBRA

A plumber charges £15 per hour plus a £30 call out fee.



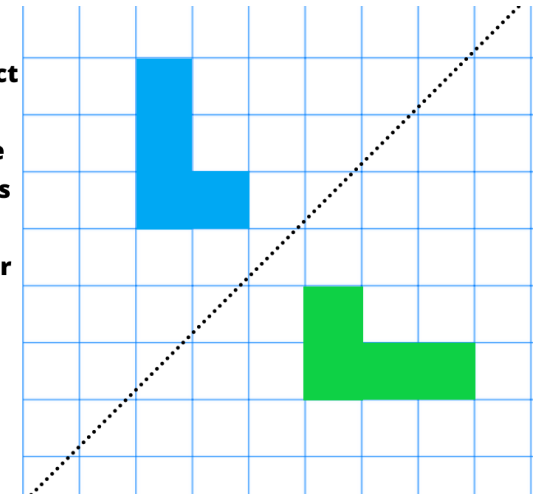
Express this algebraically (h = hours) $15h + 30$

How much would the total cost be for 3 hours work? $£70$

The plumber charges £90. How long did she spend on the job? 4 hours

Reflection

Reflect the shape across the mirror line



Place Value

Use < or > to make the statements correct

$$37854 > 37584$$

$$515689 < 516589$$

$$75235 > 72535$$

$$\frac{3}{4} \div 5 = \frac{3}{20}$$

$$3\frac{1}{3} + 1\frac{4}{5} = 5\frac{2}{15}$$


Ratio

On a school trip there are 40 people on a bus. There is 1 bus driver, 4 teachers and the rest are children. There are 5 more boys than girls in the group of children.




What is the ratio of boys to girls? $20:15$
or $4:3$

$$\begin{array}{r} 161 \\ 26 \overline{) 4186} \end{array}$$



Would you like more revision Grids delivered straight to your inbox?

Download the SATs revision app (for free) and you will receive a revision grid to support your child every week.



www.pocketprivatetutor.co.uk

