


[illegible]



A stylized illustration of a diverse group of students in school uniforms, arranged in three rows. The students have various skin tones and are wearing blue and white uniforms. The background is a solid blue color.

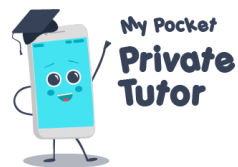
550 x 10 = 6000-

	Hamster	Cat	Dog	Total
boys		7	4	18
girls		5		
Total	7		13	

ys?

$$100 - 80 \div 4^2 =$$





SATs Revision grids

$$\frac{2}{5} \div 4 = \frac{2}{20} \text{ or } \frac{1}{10}$$

$$99\% \text{ of } 55 = 52.25$$

Ratio

Year 6 has a ratio of 4 boys to 5 girls. How many boys are there if there are 90 children in Year 6 altogether?

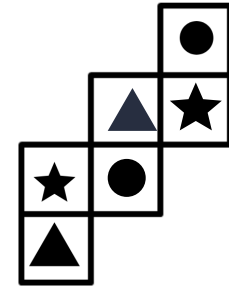
40 boys



In one class the ratio is 6 boys to 4 girls. There are 10 girls in this class. How many boys are there in this class?

15 boys

3D Shapes



Draw symbols on the blank faces so that opposite faces have the same symbol when folded into a cube

$$550 \times 10 = 6000 - 500$$

Two-Way tables

Favourite pets in Class 6C

	Hamster	Cat	Dog	Total
boys	7	7	4	18
girls	0	5	9	14
Total	7	12	13	32

Fill in the missing values in the two-way table

Which pet was the least popular among the boys?

dog

Which pet was the most popular among the girls?

dog

Measurement

Jacob, Hima and Anton are swimming. Each length of the swimming pool is 50 metres.



Jacob has swum 8 lengths, Hima has swum 9 lengths and Anton has swum 11 lengths.

How far have they swum altogether in metres?

1400 metres


How many more lengths do they need to swim to reach 2km?

12 lengths

$$100 - 80 \div 4^2 =$$


$$100 - 80 \div 16 =$$

$$100 - 5 = 95$$



Would you like more revision Grids delivered straight to your inbox?

Download the SATs revision app (for free) and you will receive a revision grid to support your child every week.



www.pocketprivatetutor.co.uk

