



SATs Revision grids


$\frac{3}{5} + \frac{2}{3} =$




$6042 - 3894 =$



$46\% \times 60 =$




$4378 + 3945 =$



Paper 1 style questions

**WRITE THE ROMAN NUMERALS
AS AN ORDINARY NUMBER**

MCDXCVIII




WHAT SHAPE AM I?

- I have 5 faces -
4 faces are triangles
1 face is a square.
- I have 5 vertices.
- I have 8 edges.

Calculate the perimeter of these two shapes.

3cm

Area = 27 cm^2


Perimeter = _____ 

4cm

7cm


8cm

4cm

Perimeter = _____ 

Round the original number to the nearest....

	nearest 1	nearest 10	nearest 100
315.64			



Paper 2 & 3 style questions



www.pocketprivatetutor.co.uk



ANSWERS

$$\frac{3}{5} + \frac{2}{3} =$$

$$\frac{9}{15} + \frac{10}{15} = \frac{19}{15} \text{ or } 1 \frac{4}{15}$$

$$6042 - 3894 = 2148$$

$$\begin{array}{r} 6042 \\ - 3894 \\ \hline 2148 \end{array}$$

$$46\% \times 60 = 27.6$$

$$\begin{array}{l} 10\% = 6 \\ 40\% = 24 \\ 5\% = 3 \\ 1\% = 0.6 \\ \hline 27.6 \end{array}$$

$$4378 + 3945 = 8323$$

$$\begin{array}{r} 4378 \\ + 3945 \\ \hline 8323 \end{array}$$

WRITE THE ROMAN NUMERALS
AS AN ORDINARY NUMBER

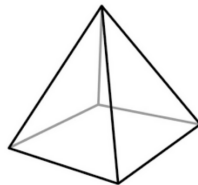
MCDXCVIII



1498

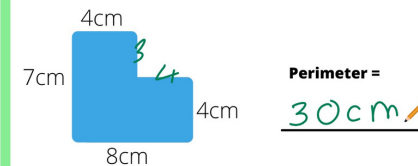



WHAT SHAPE AM I?



A square based pyramid

Calculate the perimeter of these two shapes.



Round the original number to the nearest...

	nearest 1	nearest 10	nearest 100
315.64	316	320	300

